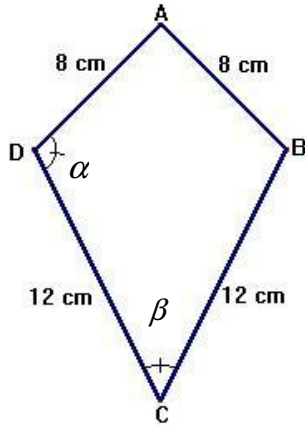


EXAM 3_1 (Coordinate Geometry-Trigonometry- Surds)

1. In the diagram shown calculate the angles α and β if the diagonal BD has length 10 cm. (1.5 points)



2. Calculate and simplify: (1.5 points)

a) $2\sqrt[3]{a^6b} - 3a^2\sqrt[3]{64b} + 5a\sqrt[3]{a^3b} + a^2\sqrt[3]{125b}$ b) $\sqrt{ab} \cdot \sqrt[3]{a^2b} \cdot \sqrt[4]{ab^3}$

3. Rationalize and simplify: (1.5 points)

a) $\frac{\sqrt{a}}{\sqrt{a} + \sqrt{b}} + \frac{\sqrt{b}}{\sqrt{a} - \sqrt{b}}$ b) $\frac{bc}{\sqrt{a} \cdot \sqrt[4]{b} \cdot \sqrt[8]{c}}$

4. With point A(2,3) and straight line $r : x - 3y + 2 = 0$ (1.5 points)

- a) Write the equation of a line parallel to r and joining the point A.
 b) Write the equation of a line perpendicular to r and joining the point A.

5. Plot these points and label each with the correct letter: (1.5 points)

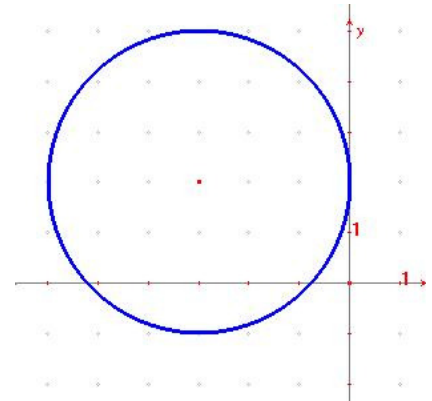
$$A = (2, 3) \quad B = (5, 12) \quad C = (10, 5)$$

- a) Draw triangle ABC.
 b) Write the coordinates of the midpoint of \overline{AC} .
 c) Find the length, correct to the nearest hundredth, of the median from B to \overline{AC} .
 d) Write the equation of the perpendicular bisector of \overline{AC} .



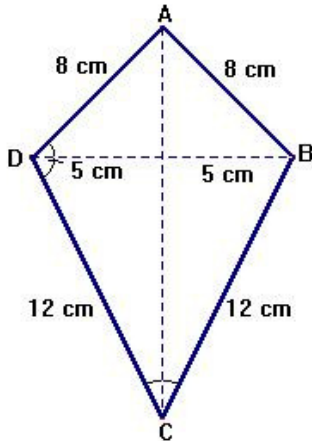
6. Suppose that $\cos \alpha = -\frac{3}{5}$ and α lies in quadrant II. Draw the angle α and find the other trigonometric ratios for α . (Don't use a calculator) (1.5 points)

7. Write the equation of the circumference in the picture (1 points)



SOLUTION

1. In the diagram shown calculate the angles α and β if the diagonal BD has length 10 cm.



$$\cos \alpha_1 = \frac{5}{8} \Rightarrow \alpha_1 = 51^\circ 19'$$

$$\cos \alpha_2 = \frac{5}{12} \Rightarrow \alpha_2 = 65^\circ 23'$$

$$\alpha = \alpha_1 + \alpha_2 = 51^\circ 19' + 65^\circ 23' = 116^\circ 42'$$

$$\alpha_2 + \frac{\beta}{2} + 90^\circ = 180^\circ \rightarrow \frac{\beta}{2} = 90 - 65^\circ 23' = 24^\circ 37'$$

$$\beta = 2 \cdot 24^\circ 37' \rightarrow \beta = 49^\circ 14'$$

2. Calculate and simplify:

a)

$$2\sqrt[3]{a^6b} - 3a^2\sqrt[3]{64b} + 5a\sqrt[3]{a^3b} + a^2\sqrt[3]{125b} = 2a^2\sqrt[3]{b} - 3a^2 \cdot 2\sqrt[3]{b} + 5a^2\sqrt[3]{b} + 5a^2\sqrt[3]{b} = 0$$

$$b) \sqrt{ab} \cdot \sqrt[3]{a^2b} \cdot \sqrt[4]{ab^3} = \sqrt[12]{a^6b^6} \cdot \sqrt[12]{a^8b^4} \cdot \sqrt[12]{a^3b^9} = \sqrt[12]{a^{17}b^{19}} = ab\sqrt[12]{a^5b^7}$$

3. Rationalize and simplify:

a)

$$\frac{\sqrt{a}}{\sqrt{a} + \sqrt{b}} + \frac{\sqrt{b}}{\sqrt{a} - \sqrt{b}} = \frac{\sqrt{a}(\sqrt{a} - \sqrt{b})}{(\sqrt{a} + \sqrt{b})(\sqrt{a} - \sqrt{b})} + \frac{\sqrt{b}(\sqrt{a} + \sqrt{b})}{(\sqrt{a} - \sqrt{b})(\sqrt{a} + \sqrt{b})} = \frac{a - \sqrt{ab} + \sqrt{ab} + b}{a - b} = \frac{a + b}{a - b}$$

$$b) \frac{bc}{\sqrt{a} \cdot \sqrt[4]{b} \cdot \sqrt[8]{c}} = \frac{bc}{\sqrt[8]{a^4b^2c}} = \frac{bc\sqrt[8]{a^4b^6c^7}}{\sqrt[8]{a^4b^2c}\sqrt[8]{a^4b^6c^7}} = \frac{bc\sqrt[8]{a^4b^6c^7}}{abc} = \frac{\sqrt[8]{a^4b^6c^7}}{a}$$

4. With point A(2,3) and straight line $r : x - 3y + 2 = 0$

a) Write the equation of a line parallel to r and joining the point A.

$$r : x - 3y + 2 = 0 \rightarrow 3y = x + 2 \rightarrow y = \frac{1}{3}x + \frac{2}{3} \Rightarrow m = \frac{1}{3}$$

$$\text{Parallel line: } y - 3 = \frac{1}{3}(x - 2) \Rightarrow y = \frac{1}{3}x - \frac{2}{3} + 3 \Rightarrow y = \frac{1}{3}x + \frac{7}{3}$$

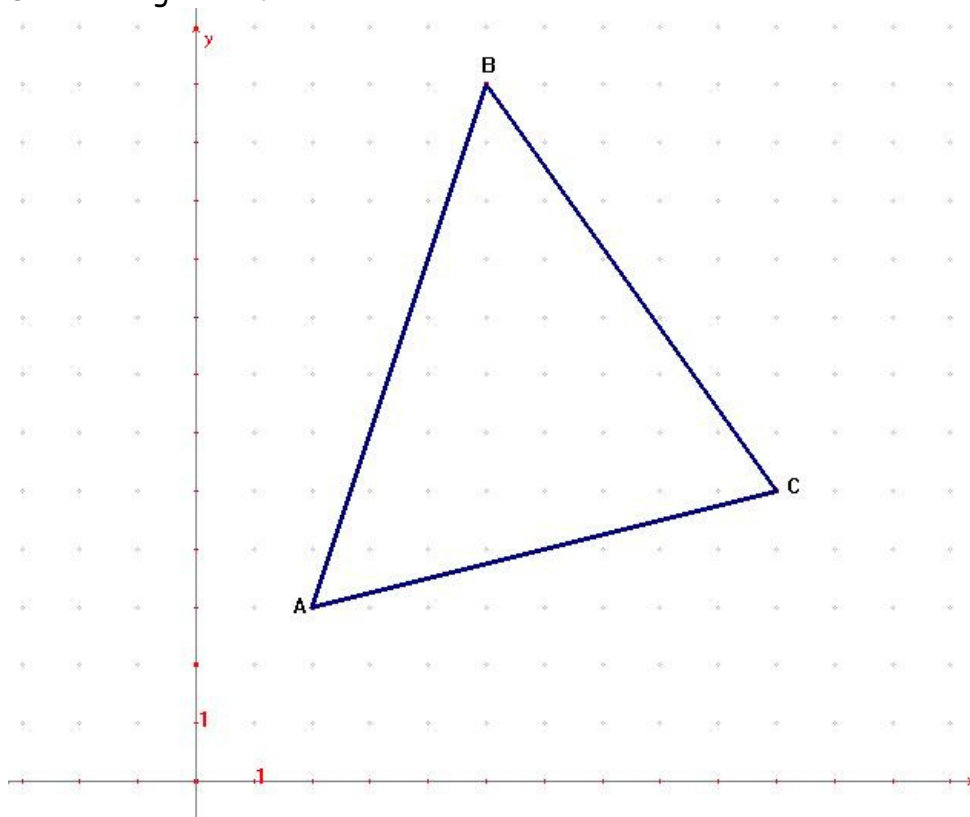
b) Write the equation of a line perpendicular to r and joining the point A .

$$\text{perpendicular line} \Rightarrow m' = -3 \rightarrow y - 3 = -3(x - 2) \Rightarrow y = -3x + 9$$

5. Plot these points and label each with the correct letter:

$$A = (2, 3) \quad B = (5, 12) \quad C = (10, 5)$$

a) Draw triangle ABC .



b) Write the coordinates of the midpoint of \overline{AC} .

$$M\left(\frac{2+10}{2}, \frac{3+5}{2}\right) \rightarrow M(6, 4)$$

c) Find the length, correct to the nearest hundredth, of the median from B to \overline{AC} .

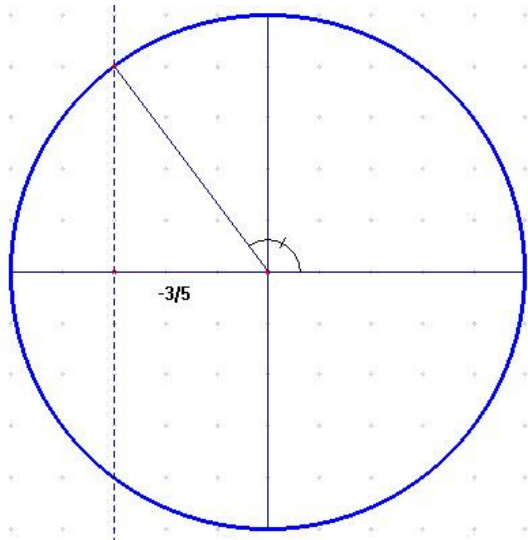
$$d(B, M) = \sqrt{(6-5)^2 + (12-4)^2} = \sqrt{1+64} = \sqrt{65} = 8.06 \text{ ul}$$

d) Write the equation of the perpendicular bisector of \overline{AC} .

$$\text{Point } M, \text{ perpendicular to } AC \Rightarrow m = \frac{y_2 - y_1}{x_2 - x_1} = \frac{3-5}{2-10} = \frac{1}{4} \Rightarrow m' = -4$$

$$y - 4 = -4(x - 6) \Rightarrow y = -4x + 28$$

6. Suppose that $\cos \alpha = -\frac{3}{5}$ and α lies in quadrant II. Draw the angle α and find the other trigonometric ratios for α . (Don't use a calculator)



$$\cos \alpha = -\frac{3}{5}; \sin^2 \alpha + \cos^2 \alpha = 1$$

$$\sin^2 \alpha = 1 - \cos^2 \alpha = 1 - \frac{9}{25} = \frac{16}{25}$$

$$\sin \alpha = \pm \sqrt{\frac{16}{25}} = \frac{4}{5}$$

$$\tan \alpha = \frac{\sin \alpha}{\cos \alpha} = -\frac{4}{3}$$

7. Write the equation of the circumference in the picture

Centre $(-3, 2)$, radius 3

Equation: $(x + 3)^2 + (y - 2)^2 = 9$

