

WORD PROBLEMS 2

- 1) The width of a rectangle is 5 metres less than its length. The area is 84 square metres. Find the dimensions of the rectangle.
- 2) The product of two consecutive odd integers is 1 less than twice their sum. Find the two integers.
- 3) One leg of a right triangle is one centimetre shorter than the other leg. If the hypotenuse is 5 cm, find the length of the shorter leg.
- 4) The product of two consecutive negative integers is 1260. What are the numbers?
- 5) A garden measuring 12 metres by 16 metres is to have a pedestrian pathway installed all around it, increasing the total area to 285 square metres. What will be the width of the pathway?
- 6) Find the fraction which becomes $\frac{1}{2}$ when the denominator is increased by 5 and is equal to $\frac{1}{3}$ when the numerator is diminished by 4.
- 7) A lady has 50 cents and 2€ coins in her purse. She has 90 coins in all and their total value is 105€. How many 2€ coins does she have?
- 8) A mixture containing 6% boric acid is to be mixed with 4 litres of a mixture that is 15% acid in order to obtain a solution that is 12% acid. How much of the 6% solution must be used?
- 9) The owner of a candy store mixes two types of candies. She decides to create a 20-pound mixture of raspberry-flavored gumdrops and cherry-flavored jelly beans. The gumdrops sell for \$0.95 per pound and the jelly beans sell for \$1.20 per pound. She plans to sell the mix for \$1.10 per pound. How many pounds of each candy should she use in her mix?
- 10) A father is 28 years older than his daughter. In 2 years' time he will be 3 times as old as his daughter. Find their present ages.

ANSWERS

1. The width of a rectangle is 5 metres less than its length. The area is 84 square metres. Find the dimensions of the rectangle.

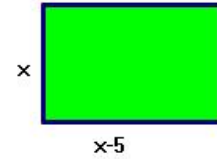
Length x , width $x - 5$

Área

$$A = x(x - 5) = 84 \rightarrow x(x - 5) = 84 \rightarrow x^2 - 5x - 84 = 0$$

$$x = \frac{5 \pm \sqrt{25 + 4 \cdot 84}}{2} = \frac{5 \pm 19}{2} = \begin{cases} 12 \\ -7 \end{cases}$$

Answer: Length 12 metres and width 7 metres



2. The product of two consecutive odd integers is 1 less than twice their sum. Find the two integers.

Consecutive odd numbers: First: $2x + 1$ Second: $2x + 3$

$$\text{Equation: } (2x + 1)(2x + 3) = 2(2x + 1 + 2x + 3) - 1$$

$$4x^2 + 2x + 6x + 3 = 2(4x + 4) - 1 \rightarrow 4x^2 + 8x + 3 = 8x + 8 - 1$$

$$4x^2 - 4 = 0 \rightarrow x^2 = 1 \Rightarrow x = \pm 1$$

Answer: First number $2 + 1 = 3$ or $-2 + 1 = -1$

Second number $2 + 3 = 5$ or $-2 + 3 = 1$

Solution: Numbers are 3 and 5 or -1 and 1

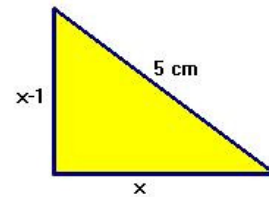
3. One leg of a right triangle is one centimetre shorter than the other leg. If the hypotenuse is 5 cm, find the length of the shorter leg.

One leg x , the other leg $x - 1$, hypotenuse 5

$$\text{Equation (Pythagoras' theorem)} \quad x^2 + (x - 1)^2 = 5^2 \rightarrow x^2 + x^2 - 2x + 1 = 25$$

$$2x^2 - 2x - 24 = 0 \rightarrow x^2 - x - 12 = 0$$

$$x = \frac{1 \pm \sqrt{1 + 48}}{2} = \frac{1 \pm 7}{2} = \begin{cases} 4 \\ -2 \leftarrow \text{NO!} \end{cases}$$



Answer: One leg is 4 cm long and the other leg 3 cm

4. The product of two consecutive negative integers is 1260. What are the numbers?

Two consecutive integers x , $x + 1$

$$\text{Equation: } x(x + 1) = 1260 \rightarrow x^2 + x - 1260 = 0$$

$$x = \frac{-1 \pm \sqrt{1 + 4 \cdot 1260}}{2} = \frac{-1 \pm 71}{2} = \begin{cases} 35 \leftarrow \text{NO} \\ -36 \leftarrow \text{YES} \end{cases}$$

Answer: the numbers are -36 and -35

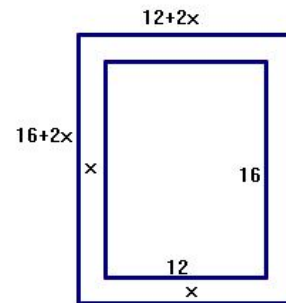
5. A garden measuring 12 metres by 16 metres is to have a pedestrian pathway installed all around it, increasing the total area to 285 square metres. What will be the width of the pathway?

Equation:

$$(2x + 12)(2x + 16) = 285 \rightarrow 4x^2 + 56x - 93 = 0$$

$$x = \frac{-56 \pm \sqrt{3136 + 4 \cdot 4 \cdot 93}}{8}$$

$$x = \frac{-56 \pm 68}{8} = \begin{cases} \frac{3}{2} \\ -\frac{31}{2} \leftarrow \text{NO} \end{cases}$$



Answer: The width of the pathway is 1.5 metres

6. Find the fraction which becomes $\frac{1}{2}$ when the denominator is increased by 5 and is equal to $\frac{1}{2}$ when the numerator is diminished by 4.

X numerator, y denominator \rightarrow fraction $\frac{x}{y}$

$$\text{Equations} \rightarrow \left. \begin{array}{l} \frac{x}{y+5} = \frac{1}{2} \\ \frac{x-4}{y} = \frac{1}{3} \end{array} \right\} \rightarrow \left. \begin{array}{l} 2x = y + 5 \\ 3x - 12 = y \end{array} \right\} \rightarrow \left. \begin{array}{l} y = 2x - 5 \\ 3x - 12 = 2x - 5 \end{array} \right\}$$

$$3x - 2x = 12 - 5 \Rightarrow x = 7 \Rightarrow y = 2 \cdot 7 - 5 = 14 - 5 = 9$$

Answer: the fraction is $\frac{7}{9}$

7. A lady has 50 cents and 2€ coins in her purse. She has 90 coins in all and their total value is 105€. How many 2€ coins does she have?

2€ coins x, 50 cents coins y

$$\text{Equations} \rightarrow \left. \begin{array}{l} x + y = 90 \\ 2x + 0.50y = 105 \end{array} \right\}$$

$$\rightarrow \left. \begin{array}{l} x = 90 - y \\ 2x + 0.5y = 105 \end{array} \right\} \rightarrow 2(90 - y) + 0.5y = 105 \rightarrow 180 - 2y + 0.5y = 105$$

$$180 - 105 = 2y - 0.5y \rightarrow 75 = 1.5y \rightarrow y = 50 \Rightarrow x = 90 - y = 90 - 50 = 40$$

Answer: She has 40 2€ coins and 50 coins of 50 cents

8. A mixture containing 6% boric acid is to be mixed with 4 litres of a mixture that is 15% acid in order to obtain a solution that is 12% acid. How much of the 6% solution must be used?

	1 st solution	2 nd solution	Mixture
litres	4	$x - 4$	x
percentage	15%	6%	12%

Equation:

$$4 \cdot 15 + (x - 4)6 = 12x \rightarrow 60 + 6x - 24 = 12x \Rightarrow 6x = 36 \Rightarrow x = 6$$

Answer: We have to use $x - 4 = 6 - 4 = 2$ litres of the 6% solution

9. The owner of a candy store mixes two types of candies. She decides to create a 20-pound mixture of raspberry-flavored gumdrops and cherry-flavored jelly beans. The gumdrops sell for \$0.95 per pound and the jelly beans sell for \$1.20 per pound. She plans to sell the mix for \$1.10 per pound. How many pounds of each candy should she use in her mix?

	gumdrops	jelly beans	Mixture
pounds	x	$20 - x$	20
Price/pound	\$0.95	\$1.20	\$1.10

Equation:

$$0.95x + 1.20(20 - x) = 1.10 \cdot 20 \rightarrow 0.95x + 24 - 1.20x = 22$$

$$0.95x - 1.20x = 22 - 24 \Rightarrow -0.25x = -2 \Rightarrow x = 8$$

Answer: She has to mix 8 pounds of gumdrops with 12 pounds of jelly beans

10. A father is 28 years older than his daughter. In 2 years' time he will be 3 times as old as his daughter. Find their present ages.

Age	Now	In 2 years' time
father	$x + 28$	$x + 28 + 2$
daughter	x	$x + 2$

$$\text{Equation: } x + 28 + 2 = 3(x + 2) \Rightarrow x + 30 = 3x + 6 \Rightarrow 2x = 24 \Rightarrow x = 12$$

Answer: The daughter is 12 years old and her father is 40 years old